




Temat: Odejmowanie ułamków dziesiętnych. 8.06.2020 r

1. Korzystając z rysunków wykonaj odejmowanie.

a)  $1 - 0,4 = \dots\dots\dots$

b)  $2 - 0,9 = \dots\dots\dots$

c)  $2 - 1,2 = \dots\dots\dots$

2. Oblicz w pamięci:

- | | | | |
|--------------------------------|--------------------------------|--------------------------------|---------------------------------|
| a) $1 - 0,3 = \dots\dots\dots$ | b) $3 - 0,5 = \dots\dots\dots$ | c) $5 - 2,5 = \dots\dots\dots$ | d) $10 - 1,7 = \dots\dots\dots$ |
| $1 - 0,7 = \dots\dots\dots$ | $2 - 0,7 = \dots\dots\dots$ | $6 - 3,5 = \dots\dots\dots$ | $8 - 3,6 = \dots\dots\dots$ |
| $1 - 0,9 = \dots\dots\dots$ | $5 - 0,6 = \dots\dots\dots$ | $10 - 4,5 = \dots\dots\dots$ | $5 - 2,9 = \dots\dots\dots$ |

3. Oblicz:

8,75	4,24	7,752	15,059
- 4,34	- 3,15	- 2,19	- 3,8
<hr/>			

Termin realizacji: 8.06.2020 r
Powodzenia.